


Can you draw an array to show these divisions?



$$6 \div 2 = 3$$

$$10 \div 2 =$$

$$8 \div 2 =$$

$$14 \div 2 =$$

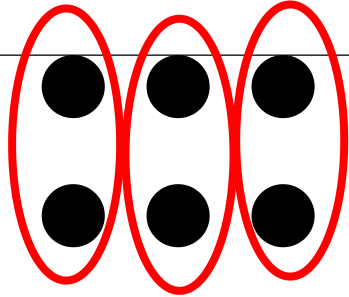
$$12 \div 2 =$$

$$18 \div 2 =$$

14/4/15

WALT: divide

Can you draw an array to show these divisions?



$$6 \div 2 = 3$$

$$12 \div 2 =$$

$$18 \div 2 =$$

$14 \div 2 =$

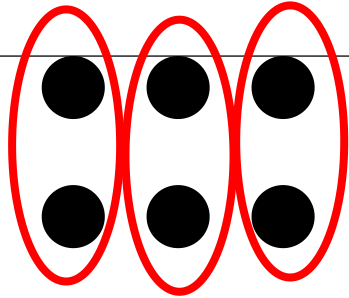
$16 \div 2 =$

$20 \div 2 =$

14/4/15

WALT: divide

Can you draw an array to show these divisions?



$6 \div 2 = 3$

$16 \div 2 =$

$18 \div 2 =$

$24 \div 2 =$	$16 \div 2 =$	$20 \div 2 =$